

Name: _____

SCORE: _____

<http://www.jazz-studies.com>

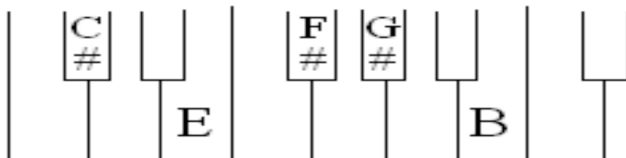
Class Hour/ Section : _____

Graded by: _____

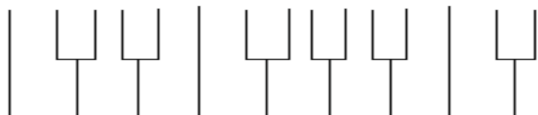
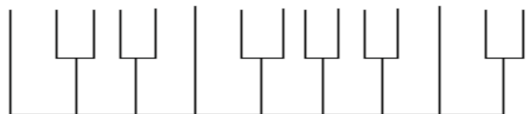
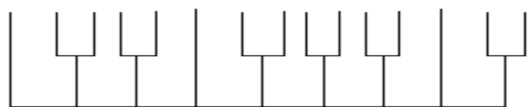
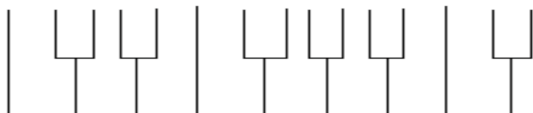
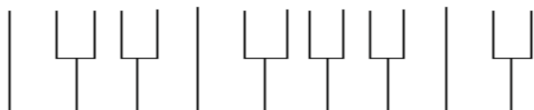
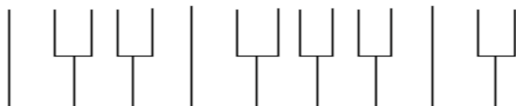
Date: _____

25 points possible. 7 examples worth 3 points = 21 points (1 point for writing the scale on the keyboard correctly, 1 point for writing the major pentatonic correctly, 1 point for writing the minor pentatonic correctly). There is also a 4 point written question at the bottom = 25 points total. WRITE THE ACCIDENTALS ON THE NOTES!

Work Sheet: Visualizing & Writing Major & Minor Pentatonic Scales




Fill in letter names.



E Major Pentatonic = C# Minor Pentatonic




B Major Pentatonic = G# Minor Pentatonic




Note: Write scale numbers below the notes as shown in the example above.


Gb Major Pentatonic = Eb Minor Pentatonic




Db Major Pentatonic = Bb Minor Pentatonic




Ab Major Pentatonic = F Minor Pentatonic




Eb Major Pentatonic = C Minor Pentatonic



Bb Major Pentatonic = G Minor Pentatonic



F Major Pentatonic = D Minor Pentatonic



How does the Minor Pentatonic differ from the Blues Scale? Describe the one difference between the two.
