

Name: \_\_\_\_\_

SCORE: \_\_\_\_\_

Class Hour/ Section : \_\_\_\_\_

Graded by: \_\_\_\_\_

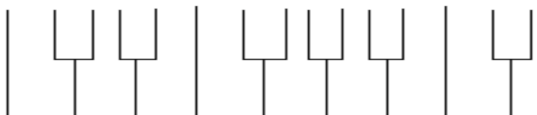
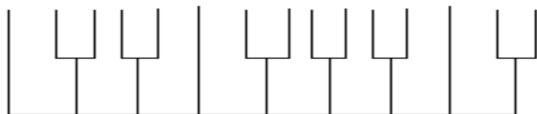
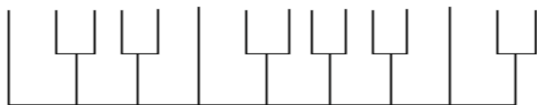
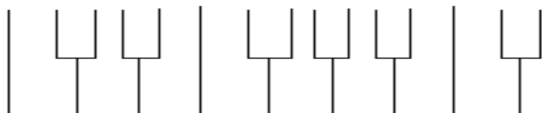
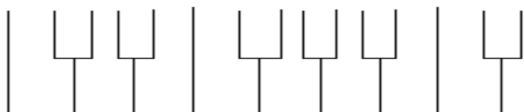
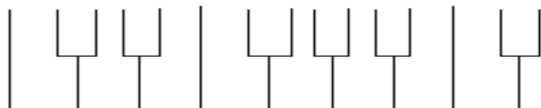
Date: \_\_\_\_\_

25 points possible. 7 examples worth 3 points = 21 points (1 point for writing the chord on the keyboard correctly, 1 point for writing the chord on the staff correctly, 1 point for listing the letter names correctly. There is also a 4 point written question at the bottom.

# Work Sheet: Visualizing & Writing Minor Seventh Chords



Fill in the letter names of the chord tones only.



C min7      WRITE THE ACCIDENTALS ON THE NOTES!

C      Eb      G      Bb

F min7

\_\_\_\_\_

Bb min7

\_\_\_\_\_

Eb min7

\_\_\_\_\_

Ab min7

\_\_\_\_\_

Db min7

\_\_\_\_\_

F# min7

\_\_\_\_\_

B min7

\_\_\_\_\_

Where does a major triad exist within the minor 7th chord?

\_\_\_\_\_