

Name: _____

SCORE: _____

<http://www.jazz-studies.com>

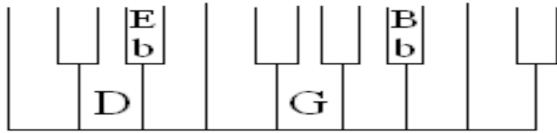
Class Hour/ Section : _____

Graded by: _____

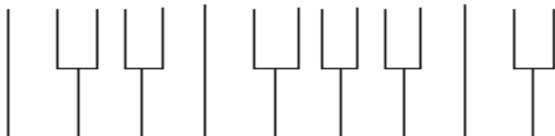
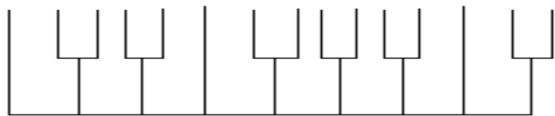
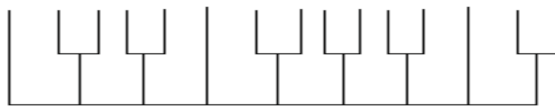
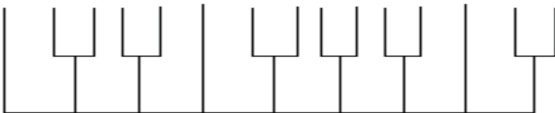
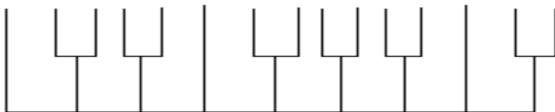
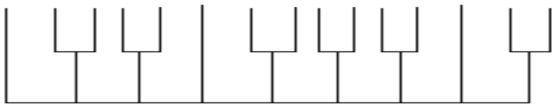
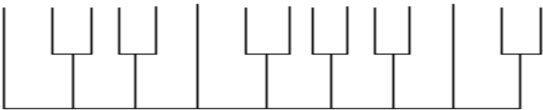
Date: _____

25 points possible. 7 examples worth 3 points = 21 points (1 point for writing the chord on the keyboard correctly, 1 point for writing the chord on the staff correctly, 1 point for listing the letter names correctly). There is also a 4 point written question at the bottom.

Work Sheet: Visualizing & Writing Major Seventh Chords



Fill in the letter names of the chord tones only.



WRITE THE ACCIDENTALS ON THE NOTES!

E_b Maj7

E_b G B_b D

A_b Maj7

D_b Maj7

F# Maj7

B Maj7

E Maj7

A Maj7

D Maj7

What is the best way to locate a major 7th within a scale? _____